

DEPARTMENT FOR CURRICULUM,
LIFELONG LEARNING AND EMPLOYABILITY
Directorate for Learning and Assessment Programmes
Educational Assessment Unit
Annual Examinations for Primary Schools 2019

YEAR 4

MATHEMATICS MENTAL PAPER

TIME: 15 minutes

Name: _____

Class: _____

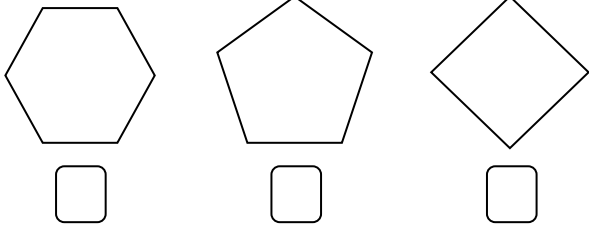
Instructions to Candidates

- The teacher will read each question twice. Listen carefully to the teacher both times. You will then have time to work out your answer.
- If you make a mistake, cross out the wrong answer and write the correct answer next to it.
- You will not be allowed to ask any questions once the test has started.
- You may do your working on the free space on the paper, but write your answer in the box given.
- This paper carries a total of 20 marks.

MENTAL PAPER ANSWER SHEET

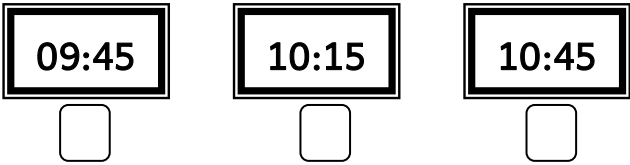
1.


2.

3. 

4. days

5. hours

6. 

7. 

8.

9.

10. 

11. ml l kg

12. lines of symmetry

13.

236

14. 1kg 10kg 1000g

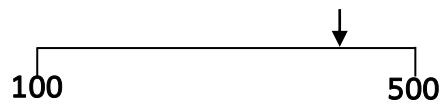
15. Position

5				
4				
3				
2				
1				
	A	B	C	D

16.



17.



18. cm

19. 10-cent coins

€5.30

20. €

29 cent



END OF MENTAL MATHEMATICS PAPER